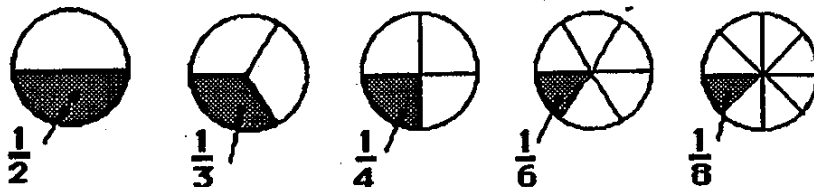


SUNSHINE MATH - 1  
Venus, XXV

Name: \_\_\_\_\_  
(This shows my own thinking.)

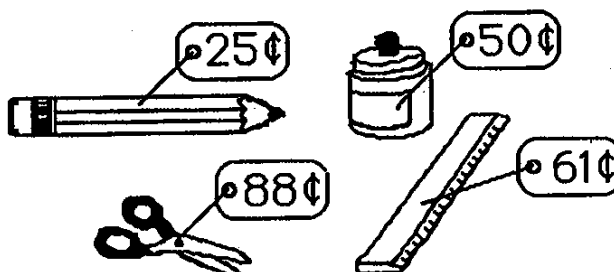
★ 1. Which piece of pie is the biggest? Write the fraction.



Answer: \_\_\_\_\_

★★ 2. Use the tax chart to find the tax for each item, and then write the total cost of each of the items below.

| Tax Chart       |     |
|-----------------|-----|
| Cost of an item | Tax |
| From 1¢ to 20¢  | 1¢  |
| From 21¢ to 40¢ | 2¢  |
| From 41¢ to 60¢ | 3¢  |
| From 61¢ to 80¢ | 4¢  |
| From 81¢ to \$1 | 5¢  |




Answer: A pencil costs \_\_\_\_\_. Paste costs \_\_\_\_\_.



Scissors cost \_\_\_\_\_. A ruler costs \_\_\_\_\_.

★★ 3. Mary had \$5.00. She bought bread for \$1.00 and a candy bar for \$1.00. How much change should she get from the store clerk?

Answer: \_\_\_\_\_

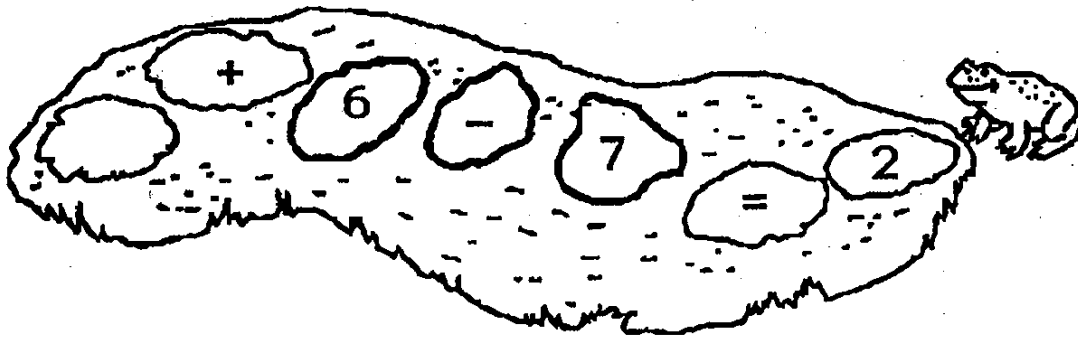
- ★★★★ 4. How many ways are there for 5 mice to live in two houses? Hint! Finish the chart.



|  |  |
|---|---|
| 0   | 5   |
| 1   | 4   |
|   |   |

Answer: There are \_\_\_\_ ways.

- ★★ 5. Help Fred Frog hop back across the pond. Fill in the missing number on the lily pad.



- ★★ 6. Wayne had to pick up a marble without looking. Which one did he probably get, black or white?

Answer: He probably got a \_\_\_\_\_ marble.

