

SUNSHINE MATH - 2
Earth, XVI

Name: _____

(This shows my own thinking.)

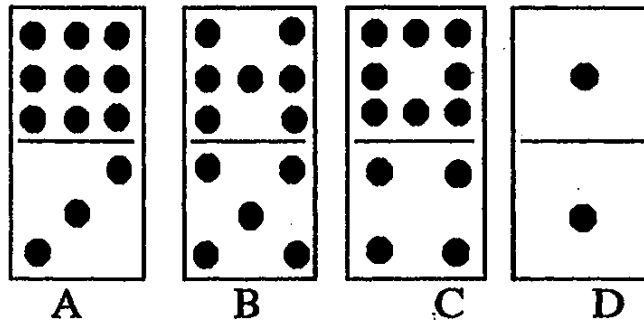
- ★★★ 1. Tanya has 60¢ in dimes and nickels. She has the same number of dimes as nickels. How many of each does she have?

Answer: _____ dimes and _____ nickels

- ★ 2. 47 pigs ran a race. 21 of them did not finish the race. How many pigs finished?

Answer: _____ pigs

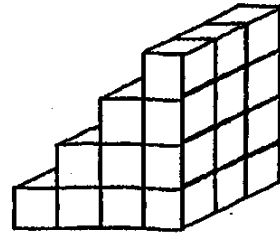
- ★★ 3. Name the domino that matches all of the clues below:



- ▲ I have 12 dots.
- ▲ There is an odd number of dots at each end.
- ▲ I have at least 4 dots on each end.

Answer: _____

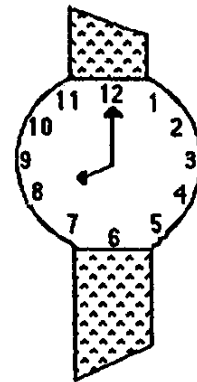
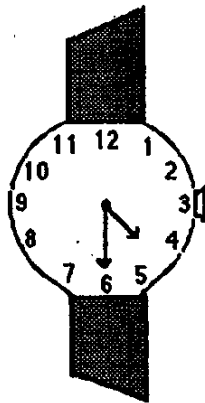
- ★★ 4. How many cubes does it take to make these steps? Each step is 3 blocks wide.



Answer: _____ cubes

- ★★★ 5. Sue, George and Rose are learning to tell time. They have brand new watches. Match the letter of the person with their watch.

- Sue said, "It is time to go home from school."
- George said, "It is time for school to start."
- Rose said, "It is 4:30 and time for soccer practice."



Answers: _____

- ★★★★ 6. Taffy had 3 female puppies. Two years later each puppy had 3 puppies herself. How many grandpuppies did Taffy have?

Answer: _____