


SUNSHINE MATH - 2
Earth, III

Name: _____
(This shows my own thinking.)

- ★★★ 1. How many apples are in the paper bag? You may use counters to help. (The bag itself does not weigh anything.)



Answer: _____ apples

- ★ 2. What number goes in the missing place?

17 - = 9

Answer: _____

- ★★★ 3. a. How many more games did the Hornets win than the Eagle

Softball Games Won

Hornets	
Pirates	
Eagles	
Bears	

- b. Which team won exactly 2 games more than another team?

= 1 game

- c. Even out the 12 wins so that each team has the same number of wins as the other teams. How many wins would each team have?

- ★★★ 4. Put the right number in each box to make true statements. Use a calculator if you need to.


a. $67 - \square = 23$ b. $28 + \square = 60$ c. $\square - 16 = 36$

- ★★ 5. You want to buy a jar of Apple Butter. How much will the Apple Butter cost if you use this coupon?




Answer: _____

- ★★★ 6. There are nine markers in one box. If you had to give one marker to each of the 29 students in your class, how many boxes would you have to buy?



Answer: _____ boxes

- ★★★★ 7. All insects have 6 legs, and all frogs have 4 legs. If Joey caught 2 insects and 3 baby frogs, how many legs would there be on all those creatures?



Answer: _____ legs