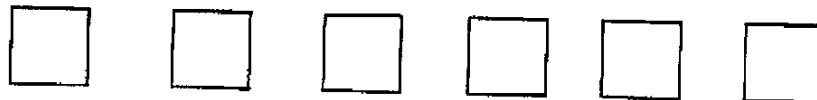



SUNSHINE MATH - K
Mercury, 2

★ 1. _____
(FIRST NAME) (LAST NAME)

★★ 2. Color in every other square:






★★ 3. How many
cats are there?






★★★ 4. If you gave a friend 2
cookies, and he ate 1
cookie, how many
cookies would he have
left?



★★★ 5. How many sides does this square have? _____ 
How many sides does this triangle have? _____ 
How many sides does this rectangle have? _____ 

★★★ 6. How many noses are there? _____
How many ears are there? _____
How many legs are there? _____



(Parents: Reading the problem to your child is ALWAYS okay. If you help them solve the problems, please initial the problem and they will receive partial credit.)