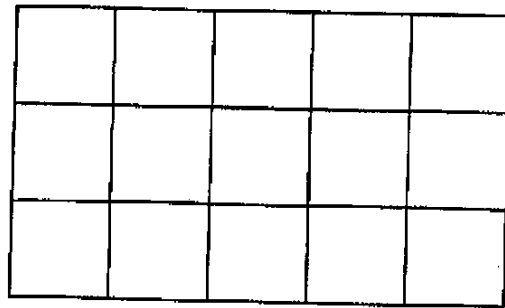




SUNSHINE MATH - K
Mercury, 4

★ 1. _____
(FIRST NAME) (LAST NAME)

★★★ 2. Color 6 squares blue and 6 squares red. How many are left that are not colored?



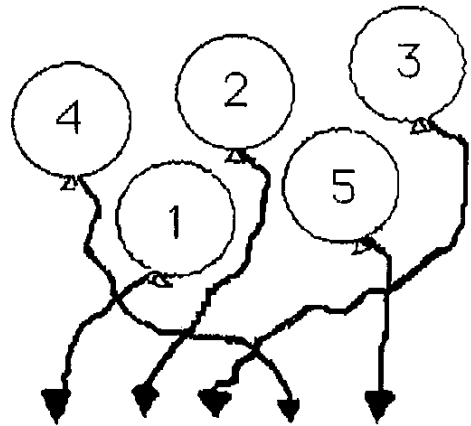
★ 3. Circle 2 dots below: Circle 5 dots below:



★★ 4. Draw the last two missing pattern pieces.



- ★★ 5. Follow the string and write the number on the line.




- ★★★★ 6. How many dogs are there? _____

How many legs do you see? _____

How many tails are there? _____

How many eyes do these two dogs have? _____



(Parents: Reading the problem to your child is ALWAYS okay. If you help them solve the problems, please initial the problem and they will receive partial credit.)