

SUNSHINE MATH - K
Mercury, 6

★ 1. _____
(FIRST NAME) (LAST NAME)

★ 2. How old is Eric? ____
(count the candles)





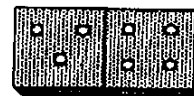



★★ 3. Fill in the missing numbers:

1 2 3 ____ 5

6 7 ____ 9 10

★★★★ 4. Match the dominoes by drawing a line to the same one.



★★★★ 5.

Color in 1 → #1

Color in 2 → #2's

Color in 3 → #3's

Color in 4 → #4's

Color in 5 → #5's

1	1	1	1	1	1
2	2	2	2	2	2
3	3	3	3	3	3
4	4	4	4	4	4
5	5	5	5	5	5

★★★★ 6. Count objects to help you do these.

$$\begin{array}{r} 1 \\ +1 \\ \hline \end{array} \quad \begin{array}{r} 3 \\ +1 \\ \hline \end{array} \quad \begin{array}{r} 2 \\ +1 \\ \hline \end{array} \quad \begin{array}{r} 1 \\ +4 \\ \hline \end{array}$$

— — — —

$$\begin{array}{r} 8 \\ +1 \\ \hline \end{array} \quad \begin{array}{r} 1 \\ +6 \\ \hline \end{array} \quad \begin{array}{r} 7 \\ +1 \\ \hline \end{array} \quad \begin{array}{r} 5 \\ +1 \\ \hline \end{array}$$

— — — —

(Parents: Reading the problem to your child is ALWAYS okay. If you help them solve the problems, please initial the problem and they will receive partial credit.)