










July 2021

Almost in Third Grade

Sunday	Monday	Tuesday	Wednesday	Thursday	Friday	Saturday
				<p style="text-align: center;">1</p> <p>Take a poll today among your friends and family: <i>What is your favorite July 4th activity?</i></p>	<p style="text-align: center;">2</p> <p>You have \$1.50 in your pocket. Make a list of 10 different combinations of coins you could have in your pocket.</p>	<p style="text-align: center;">3</p> <p>Find a flower with an odd number of petals. Do all flowers have the same number of petals?</p>
 <p>Happy 4th of July!</p>	<p style="text-align: center;">4</p> <p style="text-align: center;">5</p> <p>You won first place in a contest! You can choose to have \$20 today or \$2 a day for two weeks. Which option will earn you more money? How much more?</p>	<p style="text-align: center;">6</p> <p>Add the ages of all of the people who live in your house. Is the sum greater or less than 100? How much greater or less?</p>	<p style="text-align: center;">7</p> <p>Keep track of the temperature every day for a week. Draw a bar graph. Compare the difference in temperatures.</p>	<p style="text-align: center;">8</p> <p>Use sidewalk chalk to write as many number facts as you can in one minute.</p>	<p style="text-align: center;">9</p> <p>Use the digits 5, 7 and 2 to create as many different 3-digit numbers as you can. Which is the greatest? Which is the smallest?</p>	<p style="text-align: center;">10</p> <p>Find at least 5 different ways to make \$1.00 using nickels, dimes, and quarters.</p>
<p style="text-align: center;">11</p> <p>Use <, =, or > to complete these number sentences. 657 ___ 457+100+100 923+10 ___ 953-10-10-10</p>	<p style="text-align: center;">12</p> <p>How many times can you hop on your left foot in a minute? Your right foot? Compare the number of hops using the symbols <, >, or =.</p>	<p style="text-align: center;">13</p> <p>100 is the answer. What could the question be? Challenge yourself to think of more questions.</p>	<p style="text-align: center;">14</p> <p>Find 20 coins in your house. How much money do they add up to? Is it more or less than \$3.00?</p>	<p style="text-align: center;">15</p> <p>Write the numbers below in expanded form. For example: 583=500+80+3 729 846 295</p>	<p style="text-align: center;">16</p> <p>Go on a shape hunt for quadrilaterals. How many can you find? How are they the same? How are they different?</p>	<p style="text-align: center;">17</p> <p>115+6=113+___ Explain how you got your answer.</p>
<p style="text-align: center;">18</p> <p>If you start playing a game at 8:00 a.m. and play for an hour and a half, what time do you finish playing?</p>	<p style="text-align: center;">19</p> <p>Use <, =, or > to complete: 347+30 ___ 397-10-10 926 ___ 726+100+10</p>	<p style="text-align: center;">20</p> <p>Start with 101 and skip count by 100 until you get to 1,001. What pattern did you notice?</p>	<p style="text-align: center;">21</p> <p>Use a grocery store flyer to plan a breakfast. List all the items you need and record their prices. How much will breakfast cost?</p>	<p style="text-align: center;">22</p> <p>Jen had 20 ten-dollar bills. How many hundred-dollar bills can she trade them for?</p>	<p style="text-align: center;">23</p> <p>Estimate how long it will take you to do 100 jumping jacks. Jump and record your time.</p>	<p style="text-align: center;">24</p> <p>Find a graph in a newspaper. Talk with an adult about what the graph shows.</p>
<p style="text-align: center;">25</p> <p>Stand and jump as far as you can 3 times. Measure each jump using a yard stick or a meter stick.</p>	<p style="text-align: center;">26</p> <p>In what years were the people you live with born? Put the years in order from least to greatest.</p>	<p style="text-align: center;">27</p> <p>500+60+8 is a number. Write it as a three-digit number. Write its name in words. Draw a picture to represent the number. Locate it on a number line.</p>	<p style="text-align: center;">28</p> <p>Circle all of the even numbers: 36, 82, 47, 15, 109, 235, 998, 134, 700, 351</p>	<p style="text-align: center;">29</p> <p>Pia was having a party. She made 12 party bags with 10 stickers in each bag. How many total stickers were in the bags?</p>	<p style="text-align: center;">30</p> <p>How many days is it until your birthday? Use a calendar to find out.</p>	<p style="text-align: center;">31</p> <p>Plant a seed. Will it grow to be about 12 inches or 12 feet? Measure and record the height twice a week.</p>

August 2021

Almost in Third Grade

Sunday	Monday	Tuesday	Wednesday	Thursday	Friday	Saturday
						
1 Find four things in your house that are longer than 6 inches but shorter than 1 foot.	2 Blow bubbles outside. How many times did you blow more than 5 bubbles at once?	3 Today is Sunday. What day of the week is 15 days from now?	4 Write the number that is: 3 ones 5 tens 6 hundreds 1 thousand	5 If you bought 2 ice creams every day this week, how many ice creams would you buy?	6 Get 2 quarters, 4 dimes, 4 nickels, and 5 pennies. Make 40¢ three different ways. Make 73¢ three different ways.	7 Stand in the same spot in the morning, in the afternoon, and in the evening. What did you notice about your shadow?
8 It takes 97 licks to finish a freeze-pop. It takes 72 licks to finish a fudgesicle. About how many more licks does it take to finish a freeze-pop?	9 Start at 300 and count by twos to 350. Start at 500 and count by fives to 600. Start at 8 and count by tens to 100.	10 If a candy bar costs 87¢ and you pay with a one dollar bill, how much change will you get?	11 How many minutes are in 2 hours? What is something that takes 2 hours to do?	12 How many different number sentences (equations) can you make that have a sum of 12?	13 Each daisy has 6 petals. How many petals on 5 daisies?	14 If you start swimming at 9:00 a.m. and swim for two hours, at what time will you stop swimming?
15 How many orange halves will you have if you cut 5 oranges in half?	16 Choose an even number less than 100. What is half of that number?	17 Shade $\frac{1}{3}$. 	18 Weigh yourself. Find something in your house that weighs about the same as you.	19 Circle half of the stars. 	20 A package of popsicles has 6 popsicles. How many packages would you need for 18 kids?	21 Count out 24 Cheerios. Divide them into 2 groups. How many are in each group? Do the same for 3, 4, 6, 8 and 12 groups.
22 Look at an analog clock. What time is it? How many minutes until the next hour?	23 Fold a piece of paper in half 2 times. Open it. How many rectangles? Now, fold it in half 3 times. How many rectangles? 4 times? Can you find a pattern?	24 Measure your pillow in inches. Now measure the same pillow in centimeters.	25 Pour cereal into a small bowl. Estimate how much is in the bowl. Count to check your estimate.	26 Name this shape.  Can you find 2 things in your house that are the same shape?	27 Continue this pattern 36, 32, 28. 24, ____, ____, ____ What do you notice?	28 Find a container, cereal box, or tissue box. Measure the length and width with a ruler. Find the measurements in inches.
29 What number is 4 more than 2 tens and 7 ones?	30 First Day of Third Grade!					